

Weekplan: Introduction to Graphs

Philip Bille

Inge Li Gørtz

Reading

Introduction to Algorithms, 4th edition, Cormen, Rivest, Leisersons, and Stein (CLRS): Introduction to Part VI + Chapter 20.1-20.4 + Appendix B.4-B.5 + *Competitive Programmer's Handbook*, Laaksonen (CSES): Chapter 11-12.

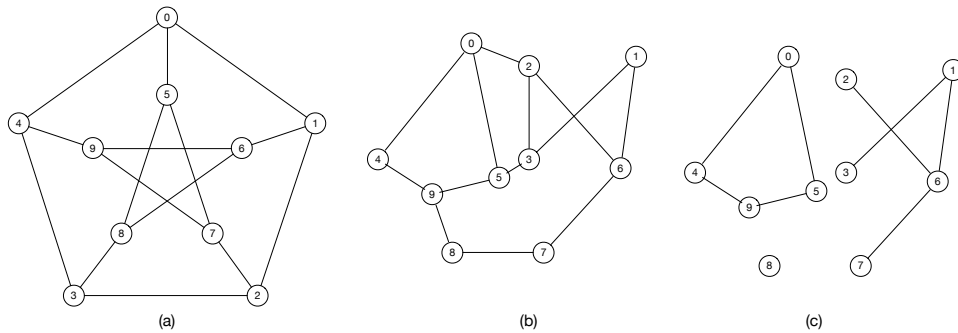


Figure 1: Graphs for the exercises. (a) is the *Petersen graph*.

Exercises

1 Representation, Properties and Algorithms Consider the graphs in Figure 1. Solve the following exercises.

- 1.1 [w] Show adjacency lists and adjacency matrices for (a) and (c).
- 1.2 [w] Simulate DFS on (a) starting in vertex 0. Assume the adjacency lists are sorted. Specify the DFS-tree and discovery and finish times.
- 1.3 [w] Simulate BFS on (a) starting in vertex 0. Assume the adjacency lists are sorted. Specify the BFS-tree and the distance for each vertex.
- 1.4 Specify the connected components of (a), (b), and (c).
- 1.5 Which of (a), (b), and (c) are bipartite?

2 Depth-First Search using a Stack Explain how to implement DFS without using recursion. *Hint:* use an (explicit) stack.

3 Find a Cycle Give an algorithm that determines if a graph is *cyclic*, ie. contains a cycle. How fast is your algorithm?

4 Number of Shortest Paths Give an algorithm that given two vertices s and t in G returns the *number* of shortest paths between s and t in G .

5 Mazes and Grid Graphs (exam 2010) A $k \times k$ *grid graph* is a graph where the vertices are arranged in k rows each containing k vertices. Only vertices that are adjacent in the horizontal or vertical direction may have an edge between them. See Figure 2(a). Solve the following exercises.

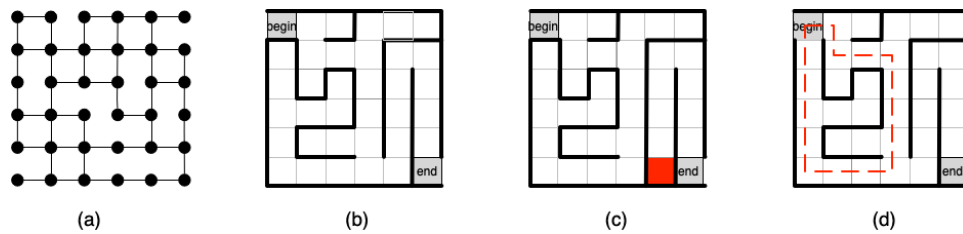


Figure 2: (a) a 6×6 grid graph. (b), (c), and (d) are 6×6 mazes. (b) is happy, (c) is unhappy since the end field cannot be reached, and (d) is unhappy since it contains a circular walk.

5.1 Let the n and m denote the number of vertices and edges, respectively, in a $k \times k$ grid graph. Express n and m as a function of k in asymptotic notation.

A $k \times k$ maze is a square drawing consisting of k^2 fields arranged in k rows each containing k fields. Each of the four sides of each field is either a wall or empty. A walk in a maze is a sequence of fields f_1, \dots, f_j such that any pair f, f' of consecutive fields in the sequence are adjacent in the horizontal or vertical direction and the shared side of f and f' is empty. A special field in the maze is designated as *begin* and another special field is designated as *end*. A maze is *happy* if the following conditions hold:

- There is exactly one unique walk in the maze from begin to end.
- There is a walk from begin to any field in the maze.
- There are no circular walks, i.e., walks that start and end in the same field.

A maze that is not happy is *unhappy*. See Figure 2(b)-(d).

5.2 Explain how to model a $k \times k$ maze as a $k \times k$ grid graph.

5.3 Draw the maze in Figure 2(b) as a grid graph.

5.4 Give an algorithm, that given a $k \times k$ maze modelled as a $k \times k$ grid graph, determines if the maze is happy. Argue the correctness of your algorithm and analyze its running time as a function of k .

6 [†] **Construction Work** Alan and Christa are new students at DTU. Due to all the construction they find it very difficult to find their way from one building to another between classes. Sometimes they even doubt that there is a way from the building they are in to the building where their next class takes place. Help Alan and Christa by giving an algorithm that computes whether there is a way to get from building a to b by following paths. There are n buildings and m paths. Give an algorithm (remember to analyse its running time and argue that it is correct) and then implement it on CodeJudge.

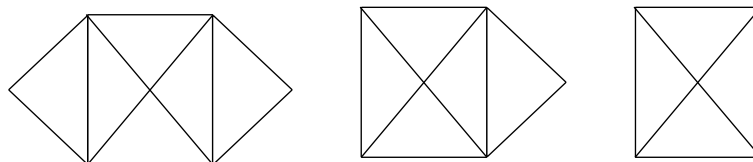
Example Let $n = 4$ and $m = 3$. Let $a = 1$ and $b = 2$, and there are paths between building 1 and 3, between 2 and 4 and between 3 and 4. Then the answer is YES as they can follow the path $1 \rightarrow 3 \rightarrow 4 \rightarrow 2$.

7 **Euler Tours and Euler Paths** Let G be a connected graph with n vertices and m edges. An *Euler tour* in G is a cycle that contains all edges in G exactly once. An *Euler path* in G is a path that contains all edges in G exactly once. Solve the following exercises.

7.1 [*] Show that G has an Euler tour if and only if all vertices have even degree.

7.2 [*] Show that G has an Euler path if and only if 2 or 0 vertices have odd degree.

7.3 Which of the drawings below can you draw without lifting the pencil? Can you start and end at the same place?



7.4 Give an $O(n + m)$ time algorithm that determines if G has an Euler tour.

7.5 [*] Give an $O(n + m)$ algorithm that finds an Euler tour in G if it exists.

8 Diameter of Trees Let T be a tree with n vertices. The *diameter* of T is the longest shortest path between any pair of vertices in T . Solve the following exercises.

8.1 Give algorithm to compute the diameter of T in $O(n^2)$ time.

8.2 [**] Give algorithm to compute the diameter of T in $O(n)$ time.